

# KENDRIYA VIDYALAYA, TPKM, MADURAI

## ACTIVITY SHEET

### LESSON : TREAT FOR MOSQUITOES

SUB :EVS

CLASS :V STD

NAME : \_\_\_\_\_

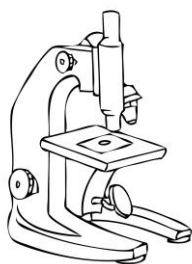
DATE: \_\_\_\_\_

#### 1. Observe the following pictures and fill on the blanks.

a) The \_\_\_\_\_ is a baby mosquito which comes from the eggs which the mosquitoes lay in \_\_\_\_\_.




b) \_\_\_\_\_ is an instrument which makes the things look \_\_\_\_\_ times bigger. \_\_\_\_\_ can be observed under it.

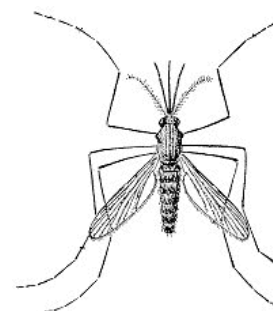


c) It is the \_\_\_\_\_ test report of Aarti .She is suffering from \_\_\_\_\_. The \_\_\_\_\_ count in her blood is 8gm/dl . The \_\_\_\_\_ range of haemoglobin in a healthy female is \_\_\_\_\_.


क्लीनिकल विकृति रिपोर्ट	
CLINICAL PATHOLOGY REPORT	
केन्द्रीय सरकार स्वास्थ्य योजना	
Central Govt. Health Scheme	
20/06/2007	
नाम/Name..... <b>Aarti</b>	आयु/Age..... <b>12</b> स्त्री या पुरुष/Sex..... <b>Female</b>
रोग की पहचान/Diagnosis.....	<b>Anaemia (अनीमिया)</b>
	Normal Range (नॉर्मल रेंज)
Haemoglobin ... <b>8</b> ... gm/dl	12 to 16gm/dl
(हीमोग्लोबिन)	
	<i>Hyp...</i> Pathologist

d)  He is a scientist named \_\_\_\_\_. He discovered that \_\_\_\_\_ is spread by mosquitoes. He got \_\_\_\_\_ prize in 1902.

e) All mosquitoes do not spread malaria .Only the \_\_\_\_\_ mosquitoes with spotted wings and \_\_\_\_\_ in colour will spread malaria. These mosquitoes are called female \_\_\_\_\_ mosquitoes.



f)



From early times the \_\_\_\_\_ of Cinchona tree was used to make a \_\_\_\_\_ for malaria .Now \_\_\_\_\_ are made from this.

**2. Write the names of the diseases caused by the following:**

a) Mosquitoes: \_\_\_\_\_

b) Flies : \_\_\_\_\_

c) Rats : \_\_\_\_\_

d) Pig : \_\_\_\_\_

e) Animal : \_\_\_\_\_

**3. What are the problems caused by Aneamia :**

---

---

---

---

**4. How can we avoid mosquito bite? Name few mosquito repellents and also draw them.**

---

---

---

---