

KENDRIYA VIDYALAYA, TPKM, MADURAI

WORKSHEET – MATHS

CLASS: V _____

Boxes and Sketches

ROLL NO: _____

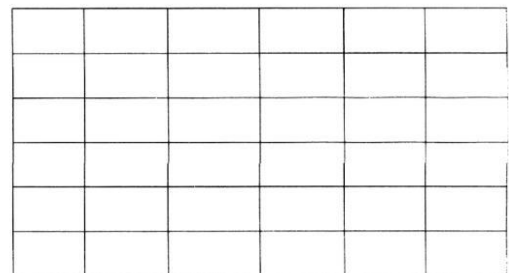


NAME: _____

DATE: _____

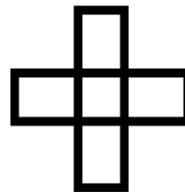
I Fill in the blanks

Sl. No.	Shape	No. of faces	No. of edges	No. of corners
1	Cube			
2	Cuboid			
3	Cylinder			
4	Cone			
5	Triangular Based pyramid			
6	Square based pyramid			

II Given on the side is a 6 by 6 grid divided into two identical parts. Find two more ways of dividing the grid into two identical parts by drawing along the lines of the grid



III. Does it make open box or closed box?

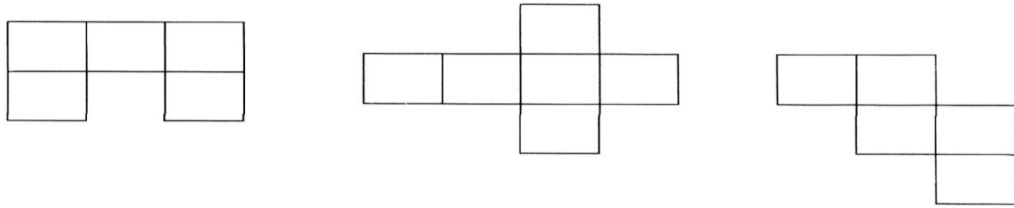


IV. Draw a floor map of your house, Make doors and windows on the deep drawing of this house



V.

Which of these nets will make a cube, tick them




II Match each net provided in coloumn A to its corresponding object in coloumn B

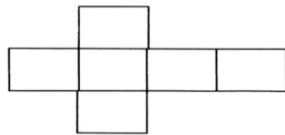
A

B

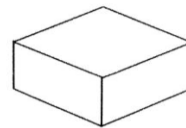
1.



2.



3.



VI. Match each shape below with a box into which it will fold :

