

WORKSHEET

7. Can you see the Patterns

CLASS: V \_\_\_\_\_



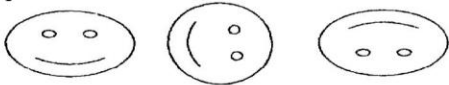
Roll No: \_\_\_\_\_

Name: \_\_\_\_\_


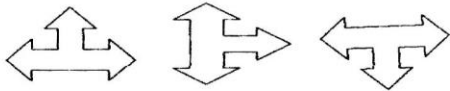
Date: \_\_\_\_\_

Complete the following patterns.



1.





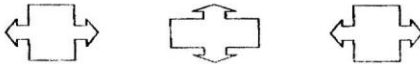
2.




3




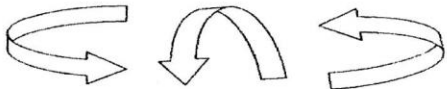
4




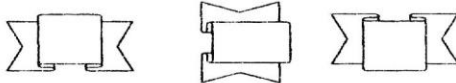
5





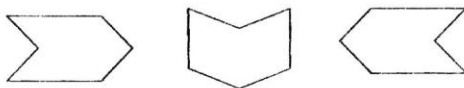
6



7



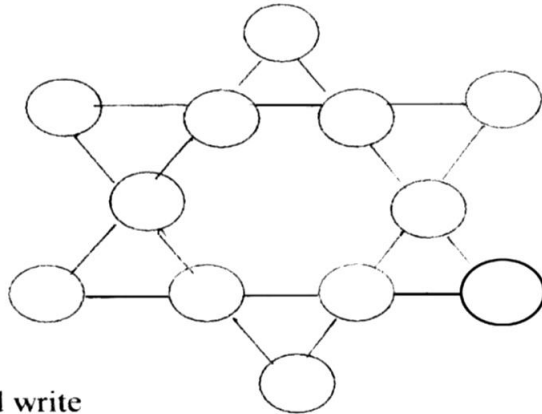
8



II. Fill in the blanks:

- 35, 45, 55, \_\_\_\_\_, \_\_\_\_\_, \_\_\_\_\_, \_\_\_\_\_.
- 100 Z, 200 Y, 300 X, \_\_\_\_\_, \_\_\_\_\_.
- 7, 17, 27, 37, \_\_\_\_\_, \_\_\_\_\_, \_\_\_\_\_.
- ABC, CDE, EFG, \_\_\_\_\_, \_\_\_\_\_, \_\_\_\_\_.
- ZA, YB, XC, WD, \_\_\_\_\_, \_\_\_\_\_, \_\_\_\_\_.

In the magic star write the numbers from 1 to 12 in  $\bigcirc$  such that the sum of 4 numbers in a row is  $\bigcirc$  26



ii. Guess and write

1. What is my secret number?

\* It is larger than half of 100.

\* It is more than 6 tens and less than 7 tens.

\* The tens digit is one more than one's digit.

\* Together the digits have a sum of 11.

You will get numbers in each  $\square$  by multiplying the numbers in the

$\bigcirc$  next to it.

